

# My Two Times Table Activity Booklet

Name: \_\_\_\_\_



I can count in 2s. Fill in the blanks.

0

2

4

6

8

10

12

14



16

18


20

I can evaluate my learning.

I think this work was...



My teacher thinks...



My next steps are:

---

---

---

---

I can complete missing number calculations.

$2 \times \underline{5} = 10$

$2 \times \underline{4} = 8$

$2 \times \underline{8} = 16$

$2 \times \underline{6} = 12$

$2 \times \underline{7} = 14$

$2 \times \underline{1} = 2$

$2 \times \underline{2} = 4$

$2 \times \underline{0} = 0$

$2 \times \underline{0} = 0$

$2 \times \underline{0} = 0$

$2 \times \underline{9} = 18$

$2 \times \underline{6} = 12$

$2 \times \underline{7} = 14$

$2 \times \underline{8} = 16$

$2 \times \underline{8} = 16$

$2 \times \underline{4} = 8$

$2 \times \underline{0} = 0$

$2 \times \underline{10} = 20$

$2 \times \underline{0} = 0$

$2 \times \underline{9} = 18$

$2 \times \underline{2} = 4$

$2 \times \underline{2} = 4$

$2 \times \underline{1} = 2$

$2 \times \underline{6} = 12$

$2 \times \underline{10} = 20$

$2 \times \underline{8} = 16$

$2 \times \underline{1} = 2$

$2 \times \underline{5} = 10$

$2 \times \underline{3} = 6$

$2 \times \underline{4} = 8$

$2 \times \underline{3} = 6$

$2 \times \underline{5} = 10$

I can complete 2 times table calculations.

$0 \times 2 = \underline{0}$

$1 \times 2 = \underline{2}$

$2 \times 2 = \underline{4}$

$3 \times 2 = \underline{6}$

$4 \times 2 = \underline{8}$

$5 \times 2 = \underline{10}$

$6 \times 2 = \underline{12}$

$7 \times 2 = \underline{14}$

$8 \times 2 = \underline{16}$

$9 \times 2 = \underline{18}$

$10 \times 2 = \underline{20}$

I can complete 2 times table calculations.

$$2 \times 0 = \underline{\mathbf{0}}$$

$$2 \times 1 = \underline{\mathbf{2}}$$

$$2 \times 2 = \underline{\mathbf{4}}$$

$$2 \times 3 = \underline{\mathbf{6}}$$

$$2 \times 4 = \underline{\mathbf{8}}$$

$$2 \times 5 = \underline{\mathbf{10}}$$

$$2 \times 6 = \underline{\mathbf{12}}$$

$$2 \times 7 = \underline{\mathbf{14}}$$

$$2 \times 8 = \underline{\mathbf{16}}$$

$$2 \times 9 = \underline{\mathbf{18}}$$

$$2 \times 10 = \underline{\mathbf{20}}$$

I can complete missing number calculations.

$$2 \times \boxed{\mathbf{0}} = 0$$

$$2 \times \boxed{\mathbf{1}} = 2$$

$$2 \times \boxed{\mathbf{2}} = 4$$

$$2 \times \boxed{\mathbf{3}} = 6$$

$$2 \times \boxed{\mathbf{4}} = 8$$

$$2 \times \boxed{\mathbf{5}} = 10$$

$$2 \times \boxed{\mathbf{6}} = 12$$

$$2 \times \boxed{\mathbf{7}} = 14$$

$$2 \times \boxed{\mathbf{8}} = 16$$

$$2 \times \boxed{\mathbf{9}} = 18$$

$$2 \times \boxed{\mathbf{10}} = 20$$

I can complete 2 times table calculations.

$2 \times 5 = \underline{10}$      $7 \times 2 = \underline{14}$      $4 \times 2 = \underline{8}$

$7 \times 2 = \underline{14}$      $2 \times 4 = \underline{8}$      $2 \times 3 = \underline{6}$

$2 \times 10 = \underline{20}$      $3 \times 2 = \underline{6}$      $0 \times 2 = \underline{0}$

$6 \times 2 = \underline{12}$      $2 \times 2 = \underline{4}$      $2 \times 2 = \underline{4}$

$2 \times 9 = \underline{18}$      $9 \times 2 = \underline{18}$      $7 \times 2 = \underline{14}$

$0 \times 2 = \underline{0}$      $2 \times 1 = \underline{2}$      $2 \times 10 = \underline{20}$

$2 \times 1 = \underline{2}$      $2 \times 0 = \underline{0}$      $3 \times 2 = \underline{6}$

$8 \times 2 = \underline{16}$      $4 \times 2 = \underline{8}$      $2 \times 5 = \underline{10}$

$2 \times 5 = \underline{10}$      $2 \times 8 = \underline{16}$      $9 \times 2 = \underline{18}$

$3 \times 2 = \underline{6}$      $1 \times 2 = \underline{2}$      $2 \times 0 = \underline{0}$

$2 \times 6 = \underline{12}$      $2 \times 5 = \underline{10}$      $2 \times 2 = \underline{4}$

I can find the products of the 2 times table.  
Circle the products.

15

5

7

20

2

12

4

11

10

8

10

15

17

16

14

6

13

18

I can count forward in 2s starting at any point.

2, 4, 6, 8, 10

8, 10, 12, 14, 16

4, 6, 8, 10, 12

4, 6, 8, 10, 12

12, 14, 16, 18, 20

I can count backwards in 2s starting at any point.

20, 18, 16, 14, 12

10, 8, 6, 4, 2

14, 12, 10, 8, 6

14, 12, 10, 8, 6

8, 6, 4, 2, 0